




# A Maths Question a Day - May

Monday	Tuesday	Wednesday	Thursday	Friday	Saturday	Sunday
<p><b>Have a go at each of these Maths challenges for every day in May!</b></p> <p style="text-align: right; font-size: small;">www.alittlebutalot.com</p>					<p>1 Subtract 2 from these numbers: 10 9 7 13 15 16</p>	<p>2 Can you draw a repeating pattern?</p>
<p>3 Two-minute challenge: share everything you know about triangles!</p>	<p>4 Can you put these numbers in order? 12 15 19 5 3</p>	<p>5 3 is my answer. Write 3 different questions to make that true.</p>	<p>6 What is one more than these numbers? 3 10 17 7 18</p>	<p>7 Add 4 to these numbers: 6 7 10 2 9</p>	<p>8 What is wrong with this pattern? </p>	<p>9 True or false: Squares have five sides.</p>
<p>10 Two-minute challenge: share everything you know about rectangles!</p>	<p>11 5 is my answer. Write 3 different questions to make that true.</p>	<p>12 Draw a circle and talk about what you know about circles.</p>	<p>13 Can you draw a number line from 0-10 and put all the numbers on?</p>	<p>14 What is the missing number in the calculation? <math>11 = \square + 3</math></p>	<p>15 Find half the following numbers: 10, 16, 8, 6 and 22.</p>	<p>16 Can you write pairs of numbers which total 9?</p>
<p>17 Two-minute challenge: share everything you know about 3D shapes!</p>	<p>18 Draw a triangle and talk about what you know about triangles.</p>	<p>19 Can you count in jumps of 2 from 0 to 20?</p>	<p>20 Joe says, "One more than 6 is 8". Do you agree? Why?</p>	<p>21 Can you write your numbers from 0-20?</p>	<p>22 Can you count in jumps of 2 from 20 to 0?</p>	<p>23 Can you list the days of the week in order?</p>
<p>24 Two-minute challenge: share everything you know about circles!</p>	<p>25 What is <math>5 + 2</math>? What other numbers can you add to make the same total?</p>	<p>26 Can you draw a rectangle? How many sides should it have?</p>	<p>27 What is one less than these numbers? 3 10 17 7 18</p>	<p>28 What's the odd one out? Why? </p>	<p>29 I have a number. I double it and get 4. What was my number? How did you work it out?</p>	<p>30 Can you get some coins and count how much money you have?</p>
<p>31 <b>TRICKY QUESTION:</b> Can you share 11 equally between 2 people?</p>	<div style="display: flex; align-items: center; justify-content: center;">  <div style="text-align: center;"> <p><b>Can you draw your working out?</b></p> <p><b>Can you show it using a written method?</b></p> <p><b>Can you talk to someone about how you worked out your answers?</b></p> </div> </div>					